



Math Revision



Name.....

Class

2. Write the numbers before and after:

	22	
--	----	--

	11	
--	----	--

	15	
--	----	--

	19	
--	----	--

	20	
--	----	--

	27	
--	----	--

	17	
--	----	--

	21	
--	----	--

	23	
--	----	--

	16	
--	----	--

	18	
--	----	--

	25	
--	----	--

	12	
--	----	--

	29	
--	----	--

3. Write the numbers in between:

1. 1 3

6. 11 13

2. 7 9

7. 3 5

3. 16 18

8. 9 11


4. 5 7

9. 12 14


5. 2 4

10. 17 19

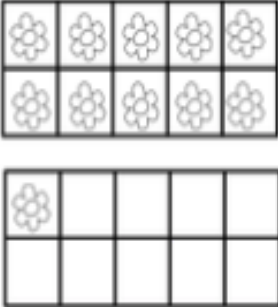

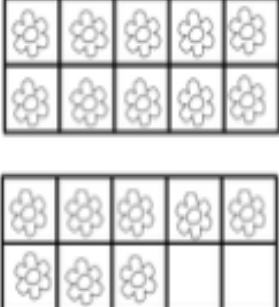



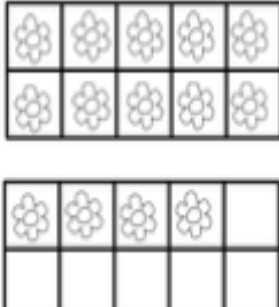

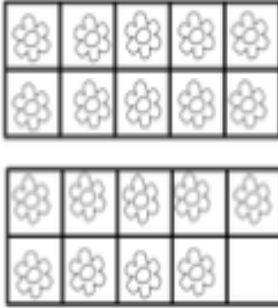



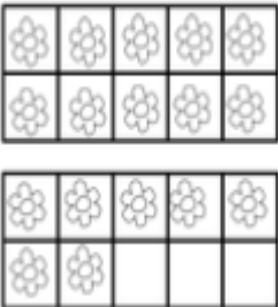

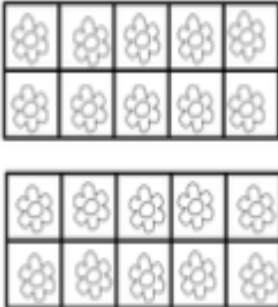

4. Count and circle the group of more pictures:



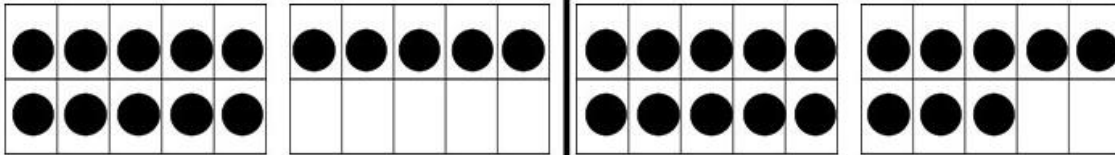
5. Count and circle the group of less pictures:



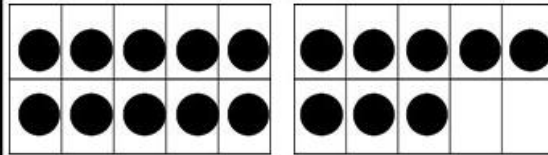
6. Count on ten frame and write the numbers:

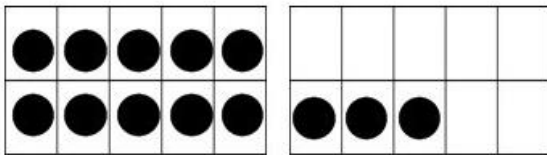
7.Count and color the correct number:



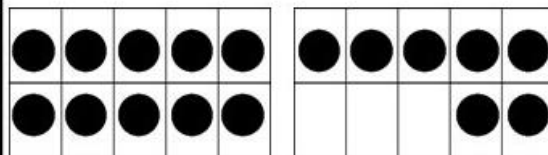
(14) (18) (15)



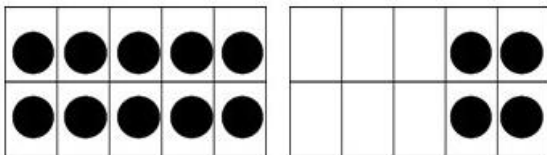
(18) (17) (19)



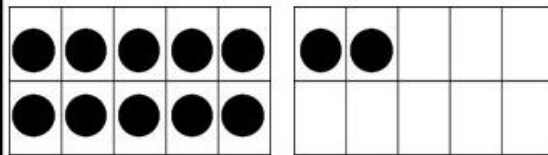
(14) (12) (13)



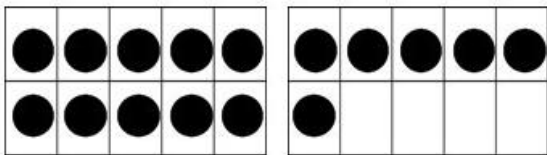
(16) (17) (15)



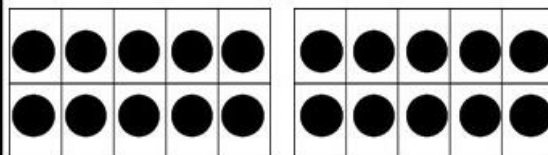
(13) (12) (14)



(12) (20) (14)



(10) (17) (16)



(18) (20) (19)

8. Write the number words:

1	
2	
3	
4	
5	
6	
7	
8	
9	
10	

9. Match the numbers to the words:

6 **five**

9 **three**

4 **seven**

2 **six**

10 **eight**

5 **nine**


1 **four**

3 **two**

7 **ten**

8 **one**

10. Count, Trace and Write the backward counting 10-1



Count	Trace	Write
10	10	
9	9	
8	8	
7	7	
6	6	
5	5	
4	4	
3	3	
2	2	
1	1	