



NAWABEGH AL-RIYADH INTERNATIONAL SCHOOL

مدارس نوابع الرياض العالمية  
2<sup>nd</sup> Semester (2021-2022)

## Math Revision Worksheet

KG-2(Reg.)



Name:.....

Class: .....

**Q1. Write the numbers (51-100).**

51								59	
			64						
						77			
81									
									100




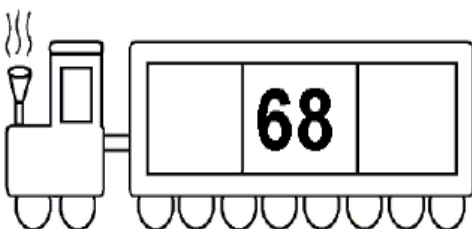



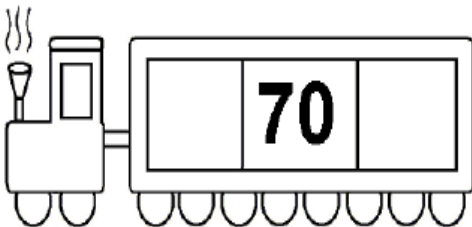
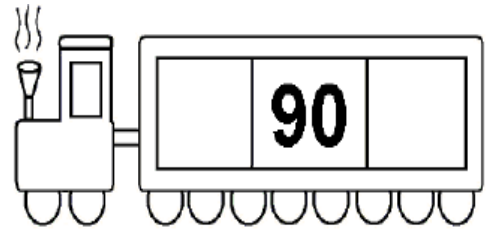

**Q2. Write the missing numbers.**

50		52		54
	61		63	

43		45		47
	54		56	

75		77		79
			88	

**Q3. Write the numbers that come before and after.**



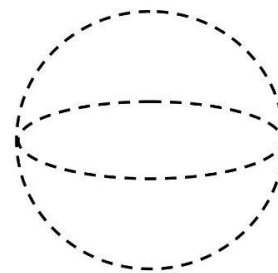
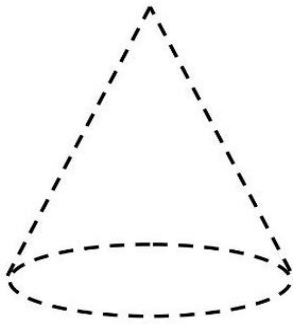
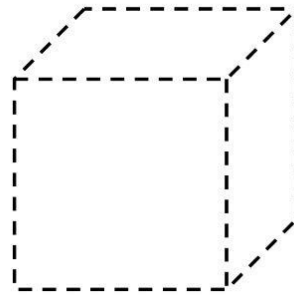
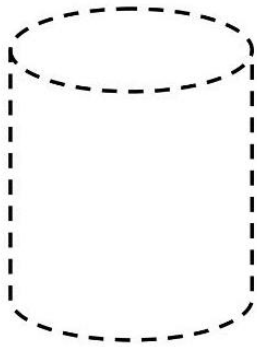
Q4. Trace, color, and write the names of solid shapes.

**Sphere**





**cube**

**Cone**

**Cylinder**



**Q5. Match the shapes with objects of the same shapes.**



**Q6. Match.**



5:00



9:00

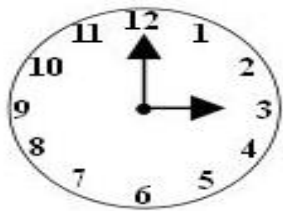


3:00

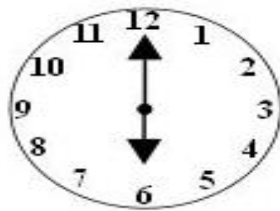


11:00


**Q7. Say and write the Time.**



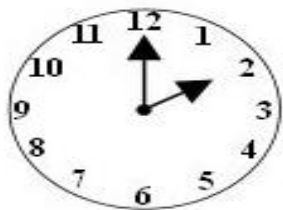
-----



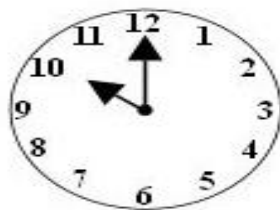
-----



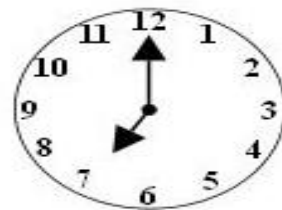
-----



-----




-----



-----

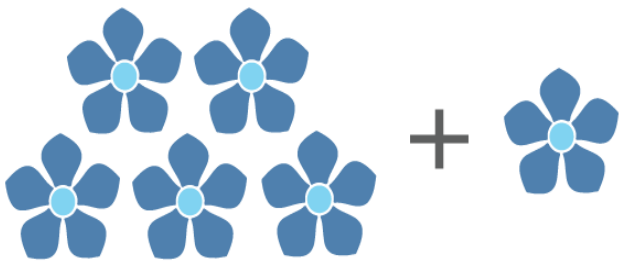
**Q8. Add.**




$$\underline{\quad} + \underline{\quad} = \underline{\quad}$$



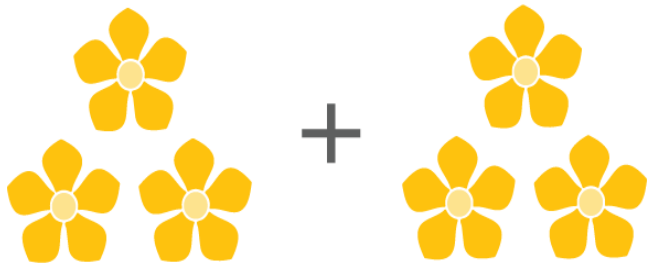
$$\underline{\quad} + \underline{\quad} = \underline{\quad}$$



$$\underline{\quad} + \underline{\quad} = \underline{\quad}$$

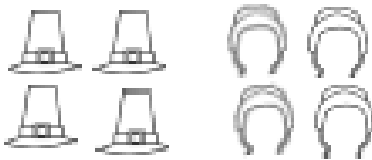
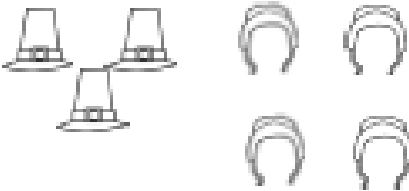

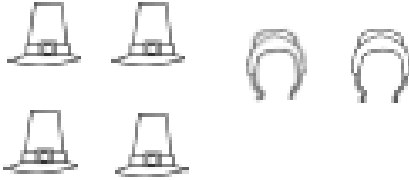
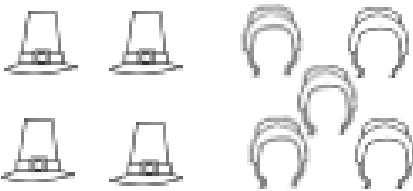

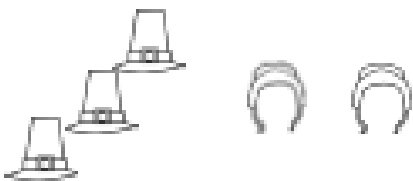



$$\underline{\quad} + \underline{\quad} = \underline{\quad}$$



$$\underline{\quad} + \underline{\quad} = \underline{\quad}$$

**Q9.Count the objects,write the numbers,then find the sum.**

 <u>4</u> + <u>    </u> = <u>    </u>	 <u>3</u> + <u>    </u> = <u>    </u>
 <u>5</u> + <u>    </u> = <u>    </u>	 <u>4</u> + <u>    </u> = <u>    </u>
 <u>4</u> + <u>    </u> = <u>    </u>	 <u>5</u> + <u>    </u> = <u>    </u>
 <u>3</u> + <u>    </u> = <u>    </u>	 <u>5</u> + <u>    </u> = <u>    </u>



Q10. Add the following numbers.

$1 + 3 = \square$

$3 + 1 = \square$

$2 + 2 = \square$

$4 + 2 = \square$

$5 + 1 = \square$

$7 + 1 = \square$

$2 + 0 = \square$


$5 + 3 = \square$

$3 + 3 = \square$

$1 + 4 = \square$

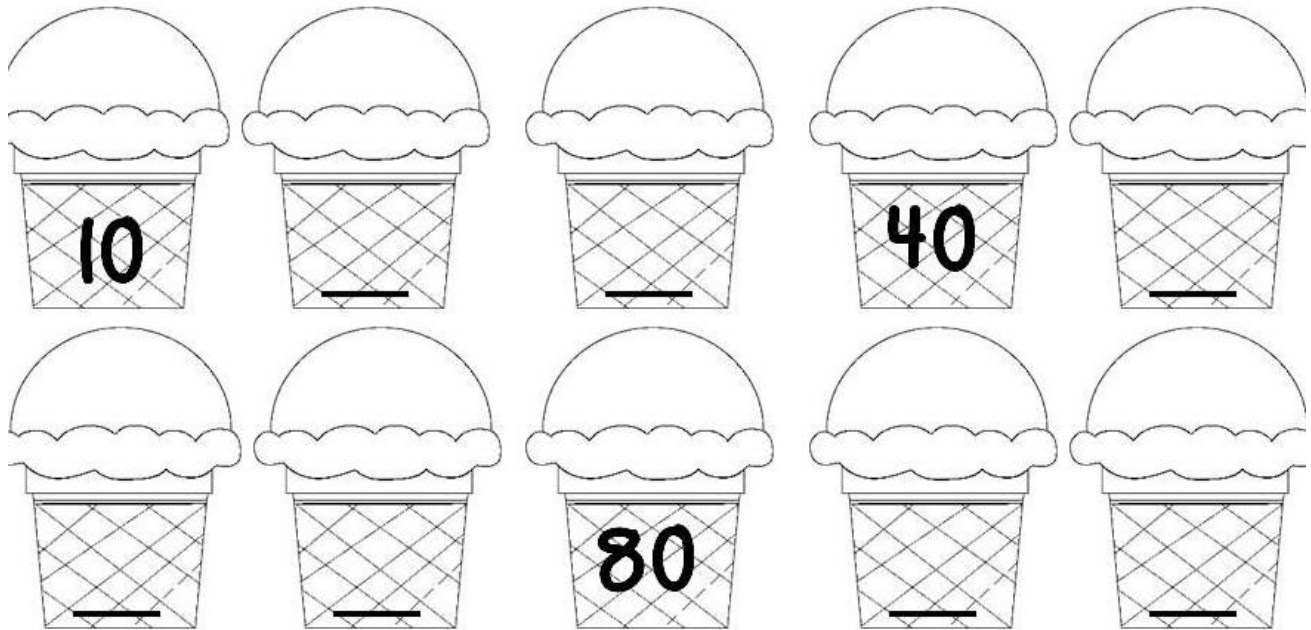
$6 + 2 = \square$

$2 + 3 = \square$



**Good  
Job!**

**Q11. Count by 10s and write the numbers.**



**Q12. Match each number to the correct number word.**

sixteen

19

eighteen

16

twenty

14

nineteen

20

fourteen

18

**Q13. Write the number words.**

**24.....**

**28.....**

**35.....**

**37.....**

**15.....**

**19.....**

**14.....**

**29.....**

**26.....**

**30.....**

**33.....**

**31.....**

**38 .....**

**23.....**

**39.....**