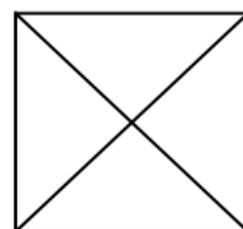
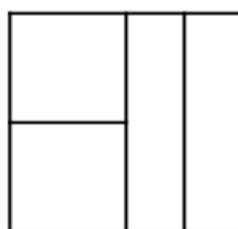
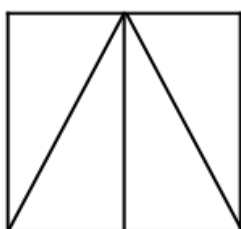
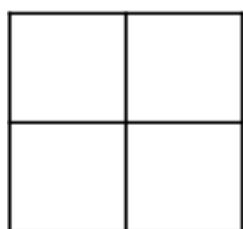




Name -----	Gr. / 3.....	Subject/ Math	<b>Revision sheet</b> <b>Model Answer</b>
------------	--------------	---------------	--

**Q.1) Write whether the shape is divided into equal parts or unequal parts.**



Equal parts

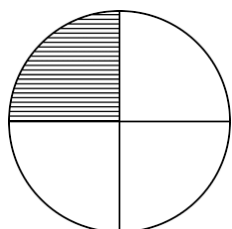
equal parts

unequal parts

equal parts

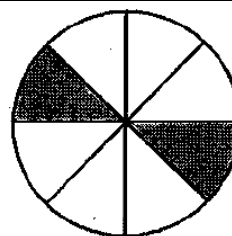
**Q.2) Write the number of equal parts in the whole.**

**Then write the fraction that names the shaded part.**



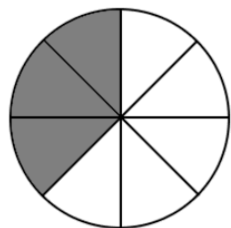
4 equal parts

$\frac{1}{4}$



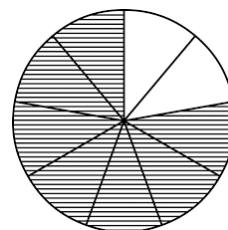
8 equal parts

$\frac{2}{8}$



8 equal parts

$\frac{3}{8}$

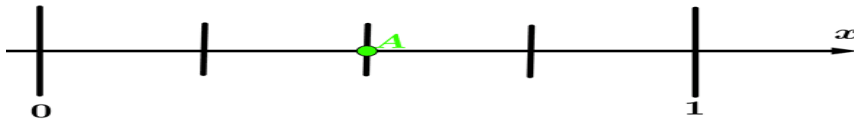


9 equal parts

$\frac{7}{9}$

**Q.3) Choose the correct answer.**

1. The fraction that names point **A** is .....

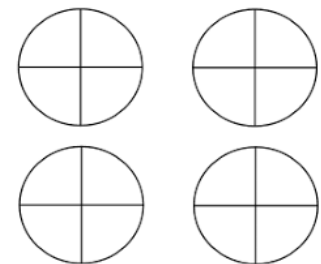


a)  $\frac{2}{4}$

b)  $\frac{3}{4}$

c)  $\frac{4}{4}$

2.  $4 = \dots\dots\dots$




a)  $\frac{10}{3}$

b)  $\frac{16}{4}$

c)  $\frac{21}{5}$

3.  $\frac{1}{5}$  of 10 = .....

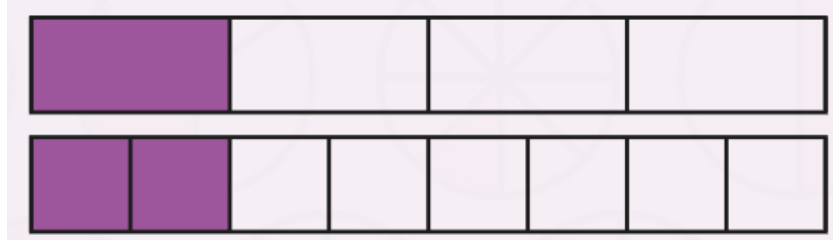


a) 2

b) 4

c) 5

4.  $\frac{1}{4} = \frac{2}{\dots\dots}$



a) 4

b) 6

c) 8

5. Find the equivalent fraction  $\frac{6}{9}$

a)  $\frac{1}{3}$

b)  $\frac{2}{3}$

c)  $\frac{3}{3}$

**Q.4) Compare. Write  $<$ ,  $>$ ,  $=$ .**

a)  $\frac{2}{5} > \frac{1}{5}$

b)  $\frac{3}{9} < \frac{8}{9}$

c)  $\frac{5}{7} < \frac{7}{7}$

d)  $\frac{4}{6} > \frac{3}{6}$

e)  $\frac{2}{3} > \frac{1}{3}$

f)  $\frac{4}{8} < \frac{6}{8}$

g)  $\frac{4}{2} > \frac{4}{3}$

h)  $\frac{5}{3} > \frac{5}{4}$

i)  $\frac{8}{3} < \frac{8}{1}$

j)  $\frac{7}{3} > \frac{7}{6}$

k)  $\frac{9}{5} > \frac{9}{7}$

l)  $\frac{2}{4} > \frac{1}{5}$

**Q.5) Solve.**

1. **Jack** moved  $\frac{2}{6}$  of his lawn in one hour. **Sam** moved  $\frac{5}{6}$  of his lawn in one hour. **Who moved less of his lawn in one hour?**

**Jack**

2. **Sara** painted 3 out of 6 equal parts of a poster board blue. **Joud** painted 4 out of 8 equal parts of a same-size poster board red. **Write fractions to show which part of the poster board each person painted.**

**Sara**  $\frac{3}{6}$  , **Joud**  $\frac{4}{8}$