



NAWABEGH AL-RIYADH INTERNATIONAL SCHOOL

مدارس نوابع الرياض العالمية  
3<sup>rd</sup> Semester (2021-2022)

# Math Revision Worksheet

## KG-2(Int.)



NAME:.....

CLASS: 2 /D

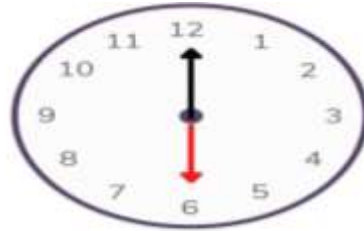
DATE :.....



Q3. What time is it?



o' clock



o' clock

Q4. Draw the hour hand to show the written time.



1:00



7:00



10:00

Q5. Find the sum.

$$4 + 1 =$$

$$0 + 4 =$$

$$3 + 1 =$$

$$4 + 1 =$$


Q6. Count to find the sum.


$$3 + 2 = \underline{\quad}$$


$$2 + 1 = \underline{\quad}$$


$$2 + 2 = \underline{\quad}$$





Q7. Circle the greater number .



Q8. Circle the smaller number.



Q9. Find the difference .

 $5 - 2 = \underline{\quad}$	 $3 - 2 = \underline{\quad}$
 $4 - 1 = \underline{\quad}$	 $5 - 5 = \underline{\quad}$

**Q10. Write the number words from (one to twenty).**

one

eleven

two

twelve

three

thirteen

four

fourteen

five

fifteen

six

sixteen

seven

seventeen

eight

eighteen

nine

nineteen

ten

twenty

Q11. Trace then match to the number words.

eleven

twelve

thirteen

fourteen

fifteen

sixteen

seventeen

eighteen

nineteen

twenty

18

15

11

12

20

16

13

17

14

19

