



www.nawabegh-riyadh.com

مدارس نوابغ الرياض العالمية

**Nawabegh Al-Riyadh International School**

**Math Revision**

**KG-1**



**Name:** .....

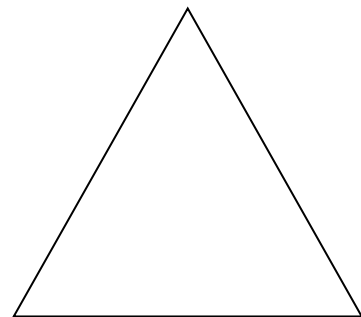



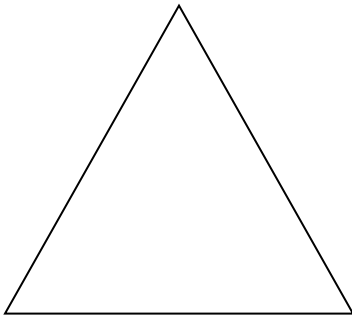


**Section:** .....






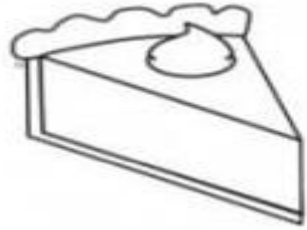
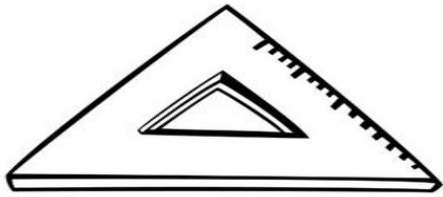
**Q2: Write the missing numbers (1 - 10). (2 times)**

	<b>1</b>					<b>1</b>	
	<b>3</b>						
						<b>4</b>	
	<b>6</b>					<b>6</b>	
	<b>8</b>						
						<b>9</b>	
<b>1</b>	<b>0</b>						



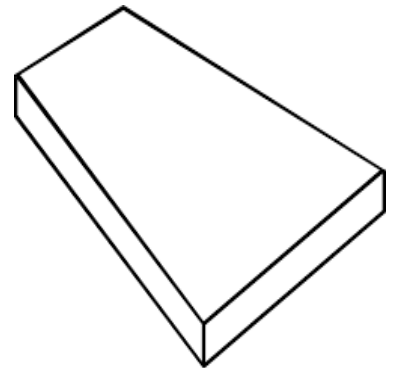

**Q3: Match the same shapes.**



**Q4: Circle all the triangle shapes.**




**Q5: Circle all the rectangle shapes.**




**6: Count and circle the correct number.**



2      3      5



9      7      5



10      9      8



2      3      6

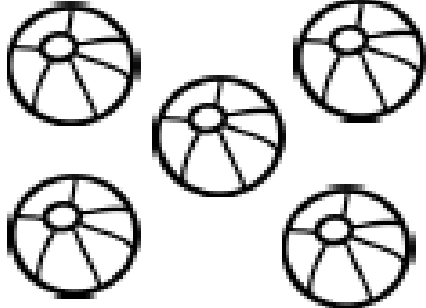










7      8      9



4      5      3

**7: Count and write the correct number.**

 <input data-bbox="285 705 431 835" type="text"/>	 <input data-bbox="740 705 886 835" type="text"/>	 <input data-bbox="1214 705 1360 835" type="text"/>
 <input data-bbox="285 1201 431 1331" type="text"/>	 <input data-bbox="740 1201 886 1331" type="text"/>	 <input data-bbox="1214 1201 1360 1331" type="text"/>
 <input data-bbox="292 1684 438 1814" type="text"/>	 <input data-bbox="747 1684 893 1814" type="text"/>	 <input data-bbox="1218 1684 1364 1814" type="text"/>

**8: Color the triangles blue.**

**Color the rectangles green.**

