

Nawabegh Al-Riyadh International School


Name :	Subject :Science
Semester: 1 st	Grade : 1/
Date :	Revision sheet

Q1. Choose the correct answer:

1. A(n) (**lake – ocean**) is a body of water that has land all around it.
2. Which animal uses lake as a source of food?



3. Frogs lay eggs (**in water – on land**).
4. You can find salt water in the (**lake – ocean**).
5. There are (**seven – three**) continents.
6. Fish use (**gills – lungs**) to breathe under water.
7. The (**Moon – Sun**) is at the beginning of most food chains.
8. Dolphins breathe through (**lungs - gills**).
9. Young frogs are called (**tadpoles – chicks**).
10. (**Whales – Ducks**) live in lakes.
11. All animals need (**food – wings**) to survive.
12. Which of the following animals live in ocean?



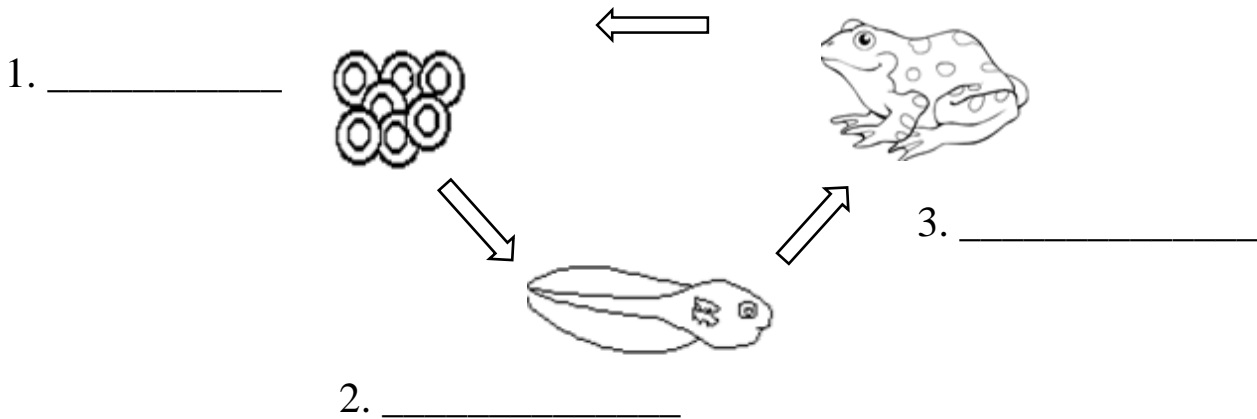
Q2. Mark (√) or (X):

- 1. People are at the top of many food chains. ()
- 2. Dolphins live in a lake. ()
- 3. All living things need food. ()
- 4. Tadpoles live on land. ()
- 5. Earth is made of land only. ()
- 6. Most of Earth's water is in oceans. ()
- 7. All animals grow and change. ()
- 8. Tadpoles breathe through lungs. ()
- 9. Flat land that are spread out are called plains. ()

Q3. Use words from the box to label the following diagram:

tadpole	eggs	life cycle	frog
---------	------	------------	------


- This is the _____ of a frog.



Q4. Use suitable words from the box to complete the following sentences:

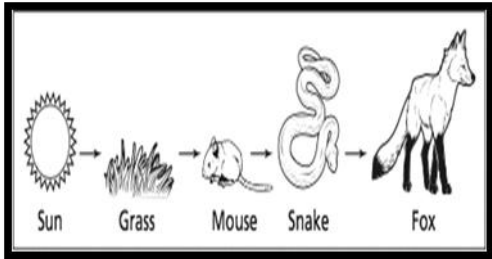
life cycle	fins	water	pollen
gills	eggs	tadpoles	shelter

1. Fish use _____ to breathe under water.
2. Birds hatch from _____.
3. Frogs lay eggs in _____.
4. Young frogs are called _____.
5. Fish have _____ that help them swim.
6. A _____ is a place where animals live.
7. Bees carry _____ from flower to flower.
8. The picture below shows a _____.



Q5. Match each picture with the word that describes it:

1.




- river

2.



- food chain

3.



- plain

4.



- ocean

Q6. Answer the following question.

1. Name two water habitats.

2. What kind of water is in the ocean?

3. What kind of water is in the lake?

4. What are the shaded parts called?