



NAWABEGH AL-RIYADH INTERNATIONAL SCHOOL
مدارس نوابغ الرياض العالمية

1st Semester 2024-2025

Math Final Revision



Name:

Class : KG 3A

Date :/12/2024

Q1. Write the numbers in order 1-50 .

1		11		21		31		41
10		20		30		40		50


Q2. Write the missing numbers.

1			4	5			8	9	
		13			16			19	20
21			24		26		28	29	
	32	33		35		37		39	
		43			46		48		





Q3. What comes before:



Q4. Write the numbers backwards from 20-1:




Q5. What comes after:




Q6. Write the names of plane shapes.

circle-rectangle- square -triangle


















Q7. Add the following Pictures:

	+		=	
_____		_____		_____
	+		=	
_____		_____		_____
	+		=	
_____		_____		_____













Q8.Match the following

- 11
- 12
- 13
- 14
- 15
- 16
- 17
- 18
- 19
- 20

- Fifteen
- Eleven
- Fourteen
- Twelve
- Sixteen
- Thirteen
- Nineteen
- Eighteen
- Seventeen
- Eighteen



Q9.Add the following pictures

	+		=	_____
	+		=	_____
	+		=	_____
	+		=	_____
	+		=	_____
	+		=	_____

Q10. Write the numbers to their words:

Eleven	
Thirteen	
Fourteen	
Twenty	
Fifteen	
Sixteen	
Twelve	
Seventeen	
Nineteen	
Eighteen	