



NAWABEGH AL-RIYADH INTERNATIONAL SCHOOL

مدارس نوابغ الرياض العالمية

2nd Semester 2024-2025

Math Revision



Name: _____

Date: _____

Class: Kg3-A

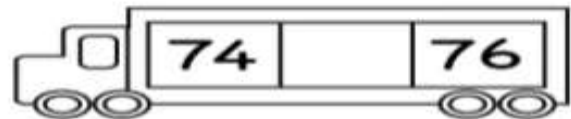
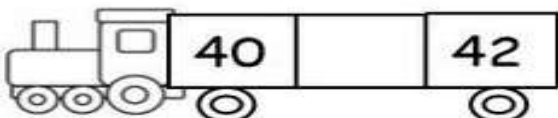
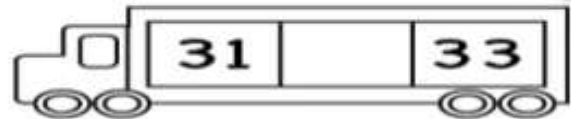
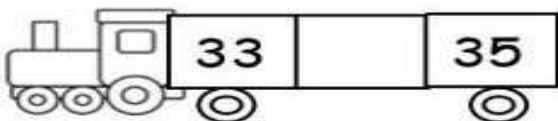

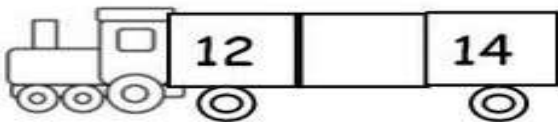
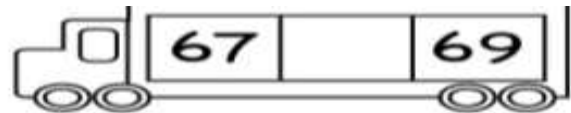
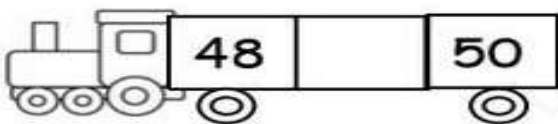
1. Write the numbers from 41-70

| | | | | | | | | | |
|--|--|--|--|--|--|--|--|--|--|
| | | | | | | | | | |
| | | | | | | | | | |
| | | | | | | | | | |


2. Write the missing numbers

| | | | | | | | | | |
|----|--|----|----|----|----|----|----|----|----|
| 41 | | 43 | | 45 | 46 | 47 | | | 50 |
| 51 | | 53 | 54 | | 56 | | 58 | 59 | |
| | | 63 | 64 | | 66 | 67 | | 69 | |


3. What comes in between:




4. Write the time for each clock:



___ o'clock



___ o'clock




___ o'clock



___ o'clock


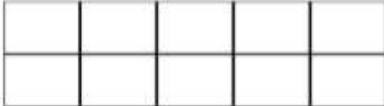




___ o'clock





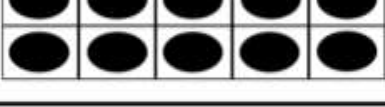

___ o'clock



5. Draw the circles to make the following numbers:

| | | | |
|---|---|--|------|
|  | + |  | = 18 |
|---|---|--|------|





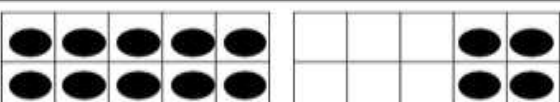

| | | | |
|---|---|--|------|
|  | + |  | = 15 |
|---|---|--|------|

| | | | |
|---|---|--|------|
|  | + |  | = 12 |
|---|---|--|------|







| | | | |
|---|---|--|------|
|  | + |  | = 13 |
|---|---|--|------|

| | | | |
|---|---|--|------|
|  | + |  | = 17 |
|---|---|--|------|

6. Count and color the correct number:

| | |
|---|--|
|  |  |
| <p>(14) (18) (15)</p> | <p>(18) (17) (19)</p> |
|  |  |
| <p>(14) (12) (13)</p> | <p>(16) (17) (15)</p> |
|  |  |
| <p>(13) (12) (14)</p> | <p>(12) (20) (14)</p> |

7. Count the objects, draw tally marks and write the numbers:

| Count | Tally Marks | Number |
|---|--|--------|
|  |  | 8 |
|  | | |
|  | | |
|  | | |
|  | | |

8. Write the words for the following numbers:

24

29

36

31

47

43

21

40

36

22
