



NAWABEGH AL-RIYADH INTERNATIONAL SCHOOL






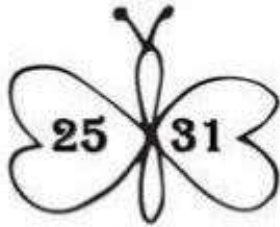



2nd Semester Final Revision 2024-2025

Name:	Class : KG3....	Subject: Math Revision	Date: .../5/2025
-------------	-----------------	------------------------	------------------

Q.1: Write the missing numbers in each row.

51									60
61									70
71									80
81									90
91									100

Q.2: Circle the number that is greater.



Q.3: Circle the number that is smaller.

4 15

14 12

25 20

12 19

13 10

12 15

18 7

2 19

21 12

15 16

23 9

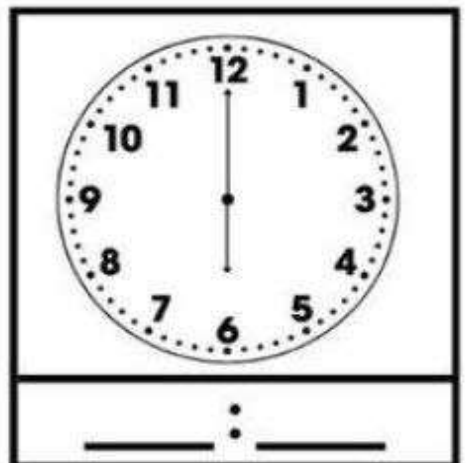
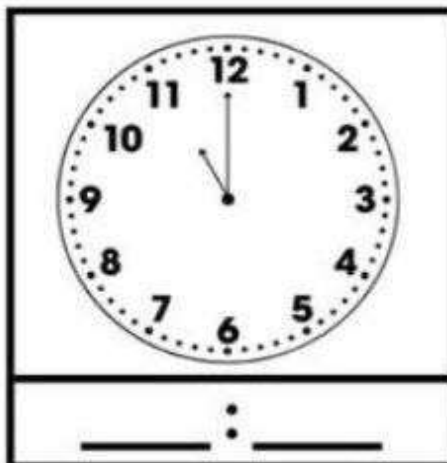
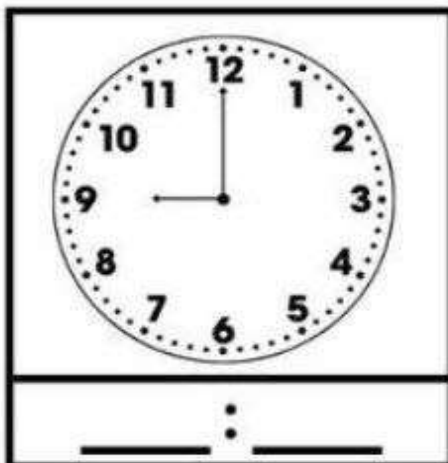

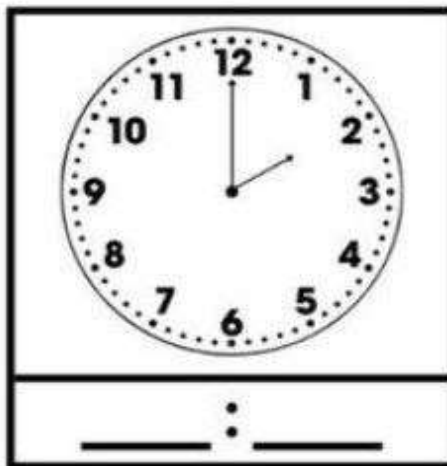
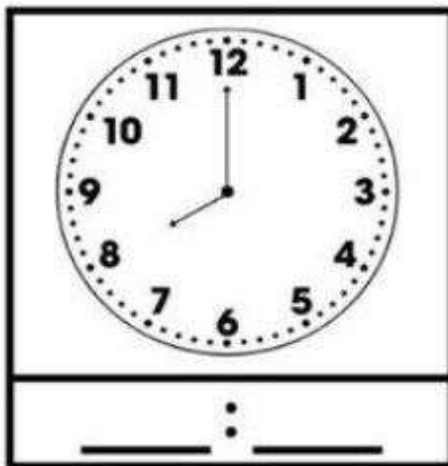


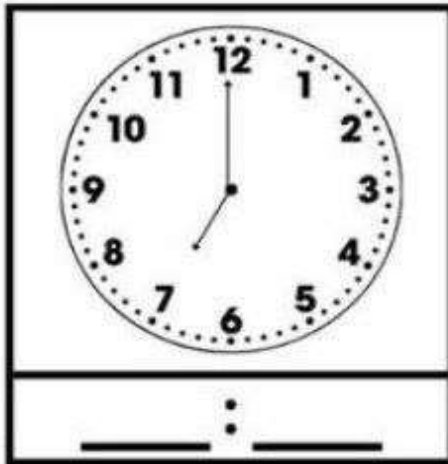
13 19

10 20

15 2

10 3

Q.4: Look at the clocks. Write the time shown on each clock.



Q.5: Circle the correct number for each word.

Thirty-three	33	30	32
--------------	----	----	----

Twenty-Nine	26	29	39
-------------	----	----	----

Twenty-Five	15	35	25
-------------	----	----	----

Thirty-Five	15	35	25
-------------	----	----	----

Thirty-One	31	30	21
------------	----	----	----

Thirty-Nine	39	36	29
-------------	----	----	----

Thirty	30	20	25
--------	----	----	----

Thirty-Six	36	39	38
------------	----	----	----

Thirty-four	24	27	34
-------------	----	----	----

Fifty	40	50	49
-------	----	----	----

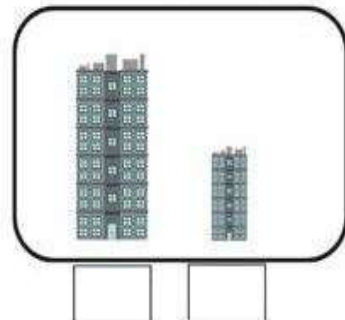
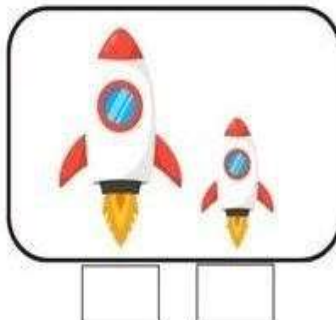
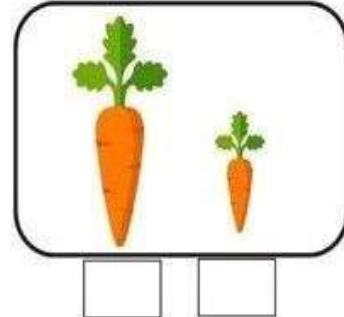
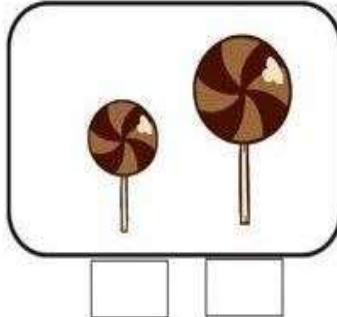
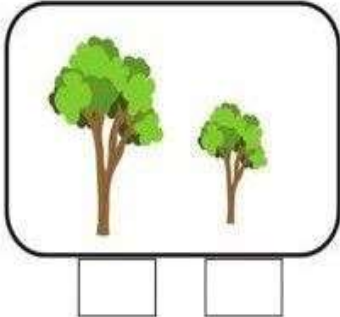
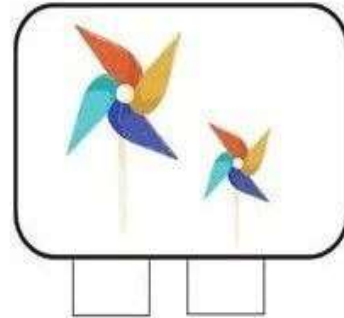
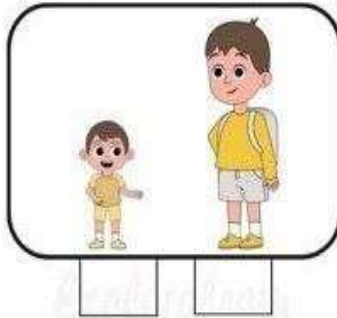


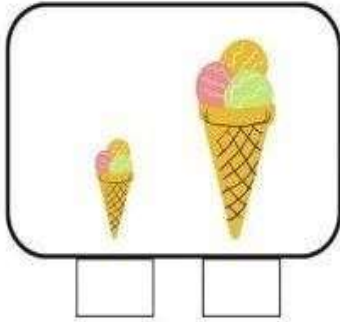
Fifteen	15	50	25
---------	----	----	----

Twenty-eight	27	18	28
--------------	----	----	----

Q.6: Find the missing number for each number sentence below.

$3 + 2 = \square$	$5 + 1 = \square$
$5 - 3 = \square$	$4 - 2 = \square$
$1 + 4 = \square$	$2 + 6 = \square$
$8 - 5 = \square$	$8 - 4 = \square$
$2 + 3 = \square$	$1 + 7 = \square$
$6 - 4 = \square$	$6 - 3 = \square$
$6 + 8 = \square$	$2 + 5 = \square$
$7 - 2 = \square$	$7 - 0 = \square$
$2 + 2 = \square$	$5 + 1 = \square$

Q.7: Tick (v)the taller one and cross (X)the shorter one





Q.8: Circle the picture that is lighter or heavier as asked in the question.

<p>Which one is heavier</p> 	<p>Which one is lighter</p> 
<p>Which one is lighter</p> 	<p>Which one is heavier</p> 
<p>Which one is lighter</p> 	<p>Which one is heavier</p> 

Q.9: Tick the correct answer.

Which picture shows the duck inside the circle?



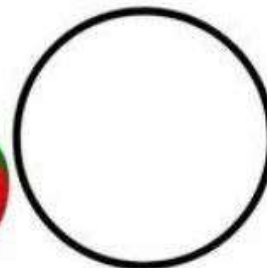
Which picture shows the car outside the circle?



Which picture shows the spoon inside the circle?



Which picture shows a ball outside the circle?



Q.10: Circle the word that describes the dog's position in relation to the object.



above below



behind next to



above below



above below

**Good
Luck**